
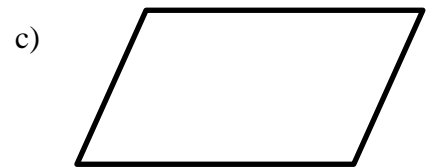
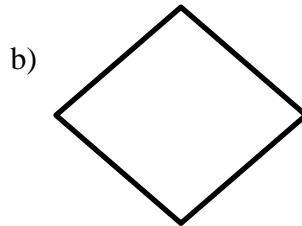


CONVENT OF JESUS AND MARY, NEW DELHI
FLOWCHARTS WORKSHEET CLASS VII (2020-21)

1. What is the difference between algorithms and flowcharts?
2. Name the following flowchart symbols and write what they are used for.

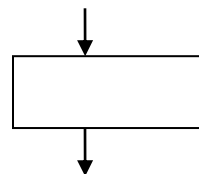
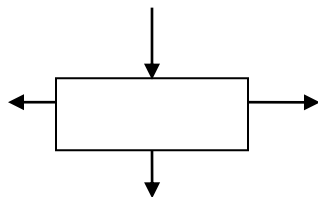


3. Fill in the blanks:

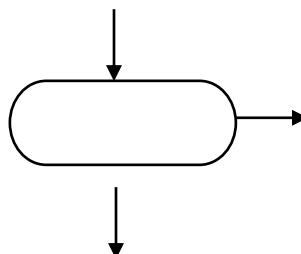
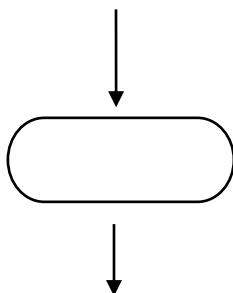
- i. A _____ is the graphical or pictorial representation of an algorithm.
- ii. A flowchart is generally read from _____ to _____
- iii. The symbols in a flowchart are connected together by _____
- iv. A decision symbol has _____ entry and _____ exit point.
- v. A _____ symbol is used at the beginning and end of a flowchart.

4. Given below are some flowcharting symbols. Put a ✓ against the correct one and ✗ against the incorrect symbol.

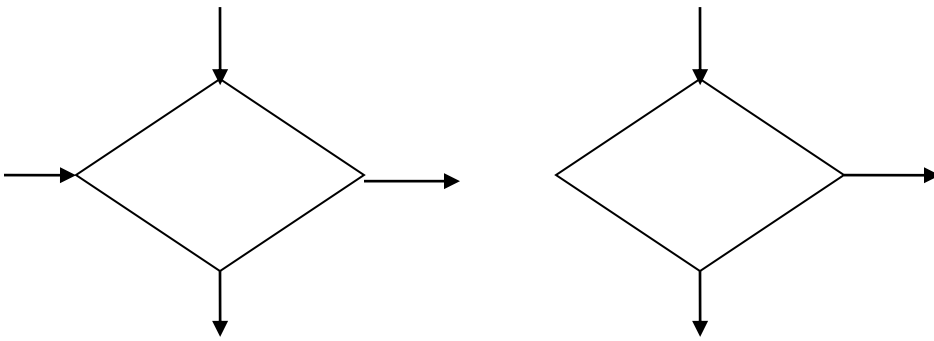
a)



b)



c)



5. Jai was drawing a flowchart to find the larger of two numbers. But he has it all mixed up!! Redraw the flowchart correctly..

